

How to draw a rough sketch of the parametric curve $x = f(t)$ **quickly while plotting only a few points**
 $y = g(t)$
when you are not able to eliminate the parameter, using $x = 3 + 2t - t^2$ $t \in (-\infty, \infty)$ **as an example**
 $y = t^2 + 2t - 8$


- [1] Sketch the graphs $x = f(t)$ and $y = g(t)$ on two separate sets of axes.
 (On both graphs, the horizontal axis is t .)

$x = 3 + 2t - t^2 = (3 - t)(1 + t)$	$y = t^2 + 2t - 8 = (t - 2)(t + 4)$
upside down parabola	upright parabola
t - intercepts -1 and 3	t - intercepts -4 and 2



- [2] Find the t - values at which either graph changes general direction
 (changes from either increasing, constant or decreasing to another general direction)
 or makes a sudden discontinuous jump.


$x = 3 + 2t - t^2$	$y = t^2 + 2t - 8$
changes from <u>increasing</u> to <u>decreasing</u> at $t = 1$	changes from <u>decreasing</u> to <u>increasing</u> at $t = -1$



- [3] On a number line for the domain of the parametric equations, mark down the values of t found in step [2].

domain of the parametric equations: $t \in (-\infty, \infty)$

number line:



- [4] For each interval that the number line is subdivided into in step [3],
 determine whether x and y are increasing or decreasing from the graphs in step [2].

Determine the direction the curve is oriented by noting that

- if x is increasing, the curve is going to the right,
- if x is decreasing, the curve is going to the left,
- if y is increasing, the curve is going upwards, and
- if y is decreasing, the curve is going downwards.

$t < -1$:	x is increasing, y is decreasing, the curve is going to the right and downwards
$-1 < t < 1$:	x is increasing, y is increasing, the curve is going to the right and upwards
$t > 1$:	x is decreasing, y is increasing, the curve is going to the left and upwards

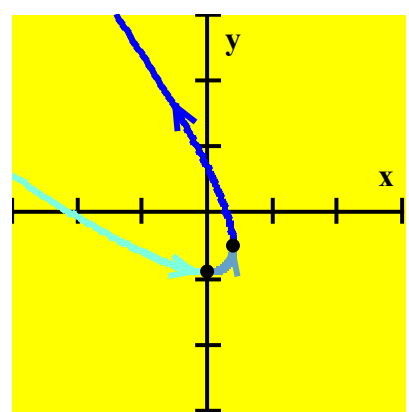
[5] At the values of t found in step [2], find the exact co-ordinates of the graph using the parametric equations. At the endpoints of the domain, find general approximations of the co-ordinates of the graph (eg. using “ $\rightarrow -\infty$ ”, “ $\rightarrow \infty$ ”, “just above 0”, “just below 0” etc.).

Note that

- $x = 0$ means “on the y – axis” (ie. y – intercept)
- x just above 0 means “just to the right of the y – axis”
- x just below 0 means “just to the left of the y – axis”
- $y = 0$ means “on the x – axis” (ie. x – intercept)
- y just above 0 means “just above the x – axis”
- y just below 0 means “just below the x – axis”
- $x \rightarrow -\infty$ means “the left side of the grid”
- $x \rightarrow \infty$ means “the right side of the grid”
- $y \rightarrow -\infty$ means “the bottom of the grid”
- $y \rightarrow \infty$ means “the top of the grid”

- $t \rightarrow -\infty$: $(x, y) \rightarrow (-\infty, \infty)$, the curve is starting from the top left corner of the grid
- $t = -1$: $(x, y) = (0, -9)$
- $t = 1$: $(x, y) = (4, -5)$
- $t \rightarrow \infty$: $(x, y) \rightarrow (-\infty, \infty)$, the curve is going off the top left corner of the grid

[6] Combine the points in step [5] with the directions in step [4] to draw a rough sketch of the curve.



NOTE: When both x and y are going towards ∞ or $-\infty$, it is useful to notice which variable has the larger absolute value. If x has the larger absolute value, the graph is closer to the x – axis than the y – axis. If y has the larger absolute value, the graph is closer to the y – axis than the x – axis.